






Name: _____

TRACE IT	BUILD IT	BREAK IT APART
16		how many tens? $\frac{1}{\quad}$ how many ones? $\underline{6}$
13		how many tens? $\underline{\quad}$ how many ones? $\underline{\quad}$
17		how many tens? $\underline{\quad}$ how many ones? $\underline{\quad}$
12		how many tens? $\underline{\quad}$ how many ones? $\underline{\quad}$
15		how many tens? $\underline{\quad}$ how many ones? $\underline{\quad}$